

Welcome to

TEN PARK

Where best friends to 10 play!



$$\underline{\quad} + \underline{\quad} = \underline{\quad}$$

$$\underline{\quad} = \underline{\quad} + \underline{\quad}$$



where best friends to 10 play!

TEN PARK

Welcome to

Welcome to

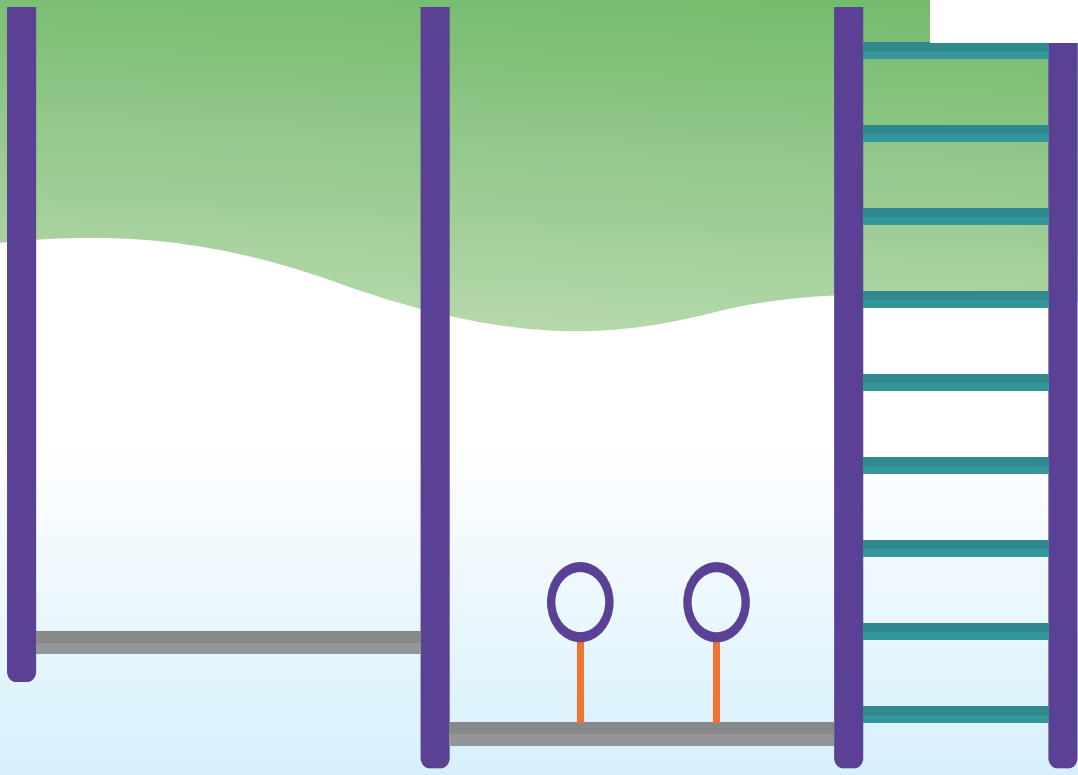
TEN PARK

Where best friends to 10 play!



$$\underline{\quad} + \underline{\quad} = \underline{\quad}$$

$$\underline{\quad} = \underline{\quad} + \underline{\quad}$$



Where best friends to 10 play!

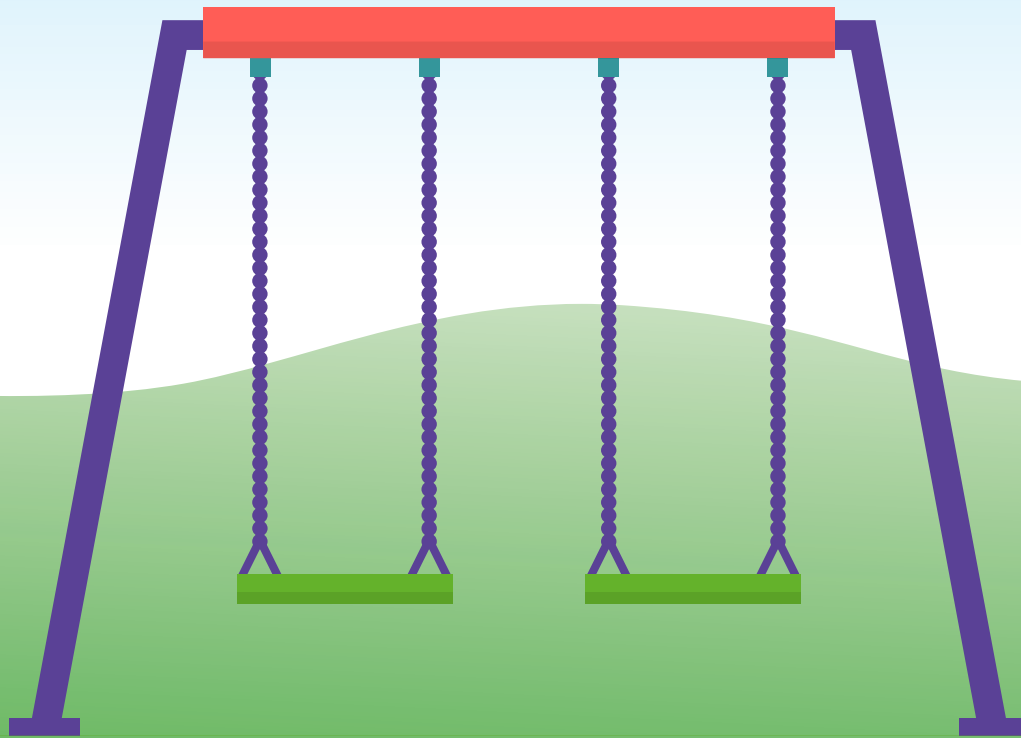
TEN PARK

Welcome to

Welcome to


TEN PARK

Where best friends to 10 play!



_____ + _____ = _____

$$\underline{\quad} = \underline{\quad} + \underline{\quad}$$



where best friends to 10 play!

WELCOME TO TEN PARK